


Tema

Wiskunde
Nina Nege 9

Graad I

Nina Nege se winkel

9



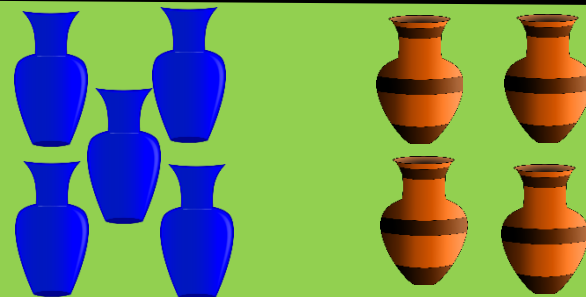
7 en 2



8 en 1



6 en 3



5 en 4

$$0 + 9 = 9$$

$$9 + 0 = 9$$

$$7 + 2 = 9$$

$$2 + 7 = 9$$

$$8 + 1 = 9$$

$$1 + 8 = 9$$

$$6 + 3 = 9$$

$$3 + 6 = 9$$

$$5 + 4 = 9$$

$$4 + 5 = 9$$

Alle items in Nina Nege se winkel is altesaam 9.

Gebruik die winkel om die antwoorde te kry.

$$0 + \square = 9$$

$$9 + \square = 9$$

$$7 + \square = 9$$

$$2 + \square = 9$$

$$8 + \square = 9$$


$$1 + \square = 9$$

$$6 + \square = 9$$

$$3 + \square = 9$$

$$5 + \square = 9$$

$$4 + \square = 9$$



9

nege