



Geld – inleiding en
herlei

Grade 3

Werk met geld




Onthou jy al die note en munte?

note

munte





Onthou:

100c = R1 of R1,00

200c = R2 of R2,00



Herlei c na R en c (skryf c as R en c)

Bv. 120c = R1,20

580c = R	R5,80
950c = R	R9,50
700c = R	R7,00
40c = R	R0,40
1110c = R	R1,10



Herlei R na c (skryf R as c)

Bv. R4,70 = 470c

R2,60 =	260c
R8,30 =	830c
R0,20 =	20c
R12,50 =	1 250c
R18,00 =	1 800c





ONTHOU!

R1 = 100c
R2 = 200c
R3 = 300c



Kan jy die volgende doen?

1. Tel: 50c ; 60c ;c ;c ;c ; R..... ; R..... ; R..... ; R1,30

2. Vyf 10c'e =

3. Hoeveel 50c'e in R1?

R2?

R4?


R10?

▪ R100 + R20 + R..... + R..... +c +c = R132,30

▪ Hoeveel R2'e in 200c? Hoeveel R2'e in R8?

▪ 5 x 20c = R.....

▪ 10 x 20c = R.....

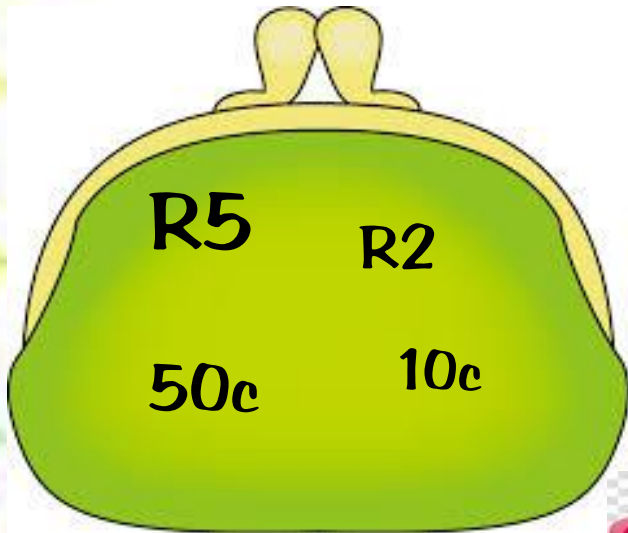


ANTWOORDE VAN DIE VORIGE BLADSY

1. 50c ; 60c ; 70c ; 80c ; 90c ; R1,00 ; R1,10 ; R1,20 ; R1,30
2. 50c
3. 2
4
8
20
4. $R100 + R20 + \underline{R10} + \underline{R2} + \underline{20c} + \underline{10c} = R132,30$
5. 1 4
6. R1,00
7. R2,00
8. 20



Hoeveel geld is in hierdie beursies?



R7.60



R61,20



R102,50



R420,30