



Dag 1

Dag 1: Tuiswerk



Tel in veelvoude van 10 vanaf 10 tot 100:

10 20 30 40 50 60 70 80 90 100

Tafels: $10 \times \div$

$$7 \times 10 \rightarrow \dots 70 \dots - 10 \rightarrow \dots 60 \dots \div 10 = \dots 6 \dots$$

$$40 \div 10 \rightarrow \dots 4 \dots \times 5 \rightarrow \dots 20 \dots \div 2 \rightarrow \dots 10 \dots \times 10 = \dots 100 \dots$$

$$3 \times 10 \rightarrow \dots 30 \dots \times 2 \rightarrow \dots 60 \dots \div 10 \rightarrow \dots 6 \dots \times 2 \rightarrow \dots 12 \dots \times 10 = \dots 120 \dots$$

Aktiviteit 3: Uitgebreide notasie.

$$1) 246 = 200 + 40 + 6$$

$$2) 209 = 200 + 0 + 9$$

$$3) 332 = 300 + 30 + 2$$

$$4) 650 = 600 + 50 + 0$$

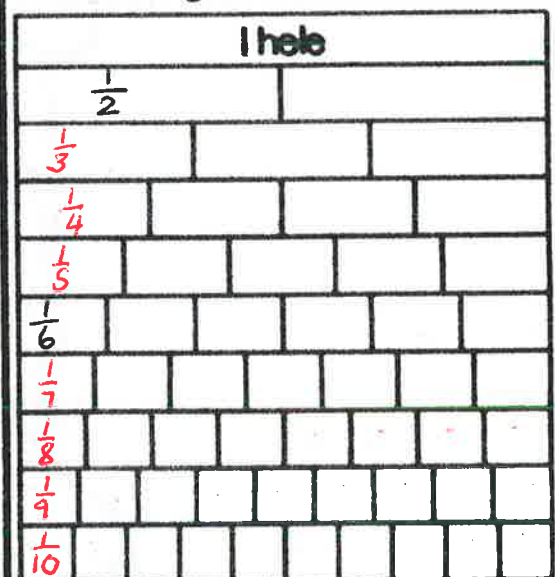
$$5) 730 = 700 + 30 + 0$$

$$6) 467 = 400 + 60 + 7$$

$$7) 183 = 100 + 80 + 3$$


$$8) 555 = 500 + 50 + 5$$

Aktiviteit 3: Dui die breukdele aan in diagramme, bv. $\frac{1}{2}$; $\frac{1}{3}$



d) Reël: Tel terug (aan/terug) in veelvoude van 50

500 | 450 | 400 | 350 | 300 | 250 | 200 | 150 | 100 | 50



Tel aan op getallelyn. Omkring getal van die dag.



voor	tussen	na
151...152	151...152...153	152...153

Merk :
 ewe getal
 onewe getal

Verdubbel in stappe:
 $152 = \square$
 $152 = 100 + 50 + 2$
 $\quad \quad \downarrow \quad \quad \downarrow$
 $\quad \quad 200 + 100 + 4$
 $\quad \quad = 304$

Skryf die getalnaam:
 eenhonderd twee en vyftig

Rond af tot die naaste 10:

$152 \rightarrow 150$

Uitgebreide notasie:

$152 = 100 + 50 + 2$

H	T	E



Getalwaarde:

$152 - 100$ $152 - 50$ $152 - 2$

Plekwaarde: HTE

$152 - H$ $152 - T$ $152 - E$

Halveer in stappe:
 $152 = \square$
 $152 = 100 + 50 + 2$
 $\quad \quad \downarrow \quad \quad \downarrow \quad \quad \downarrow$
 $\quad \quad 50 + 25 + 1$
 $\quad \quad = 76$

Meer of minder as:


8 meer as $152 = 160$

7 minder as $152 = 145$

10 minder as $152 = 142$

20 meer as $152 = 172$

Beskryf, vergelyk en orden getalle tot 500.



Optel of aftrek veelvoude van 10 tot 100.



0 10 20 30 40 50 60 70 80 90 100

$60 - 10 = 50$ $80 + 10 = 90$ $10 + 10 = 20$

$30 - 10 = 20$ $50 - 10 = 40$ $90 + 10 = 100$

$30 + 10 = 40$ $40 + 10 = 50$ $100 - 10 = 90$

$60 - 10 = 50$ $30 - 10 = 20$ $40 - 10 = 30$

Bereken die volgende somme

$226 + 148 = \square$

$200 + 100 = 300$

$20 + 40 = 60$

$6 + 8 = 14$

$300 + 60 + 14 = 374$

$56 + 304 = \square$

$300 + 0 = 300$

$50 + 0 = 50$

$6 + 4 = 10$


$300 + 50 + 10 = 360$

As ek 34 potlode tussen 4 maats verdeel, hoeveel potlode kry elkeen en hoeveel potlode bly oor? (Maak groepies)

$34 \div 4 = \square$

$32 \div 4 = 8$

$34 \div 4 = 8 \text{ res } 2$



Elkeen kry8..... potlode en2..... potlode bly oor.

$65 \div 5 = \square$

5 10 (15) 20 25
30 35 40 45 (50)

$50 \div 5 = 10$

$15 \div 5 = 3$

$10 + 3 = 13$

$52 \div 4 = \square$

4 8 (12) 16 20
24 28 32 36 (40)

$40 \div 4 = 10$

$12 \div 4 = 3$

$10 + 3 = 13$