



Dag 5







Vermenigvuldig getalle 1 tot 10 met 2, 3, 4 en 5.

5	$\times 2$	10
2		4
8		16
9		18
4		8
3		6
7		14
6		12

3	$\times 3$	9
7		21
4		12
6		18
2		6
8		24
5		15
9		27

2	$\times 4$	8
7		28
8		32
5		20
3		12
4		16
6		24
9		36

1	$\times 5$	5
5		25
4		20
7		35
2		10
3		15
6		30
9		45



# Vul die ontbrekende getalle in

Tel in drieë. begin by 702. Kleur die blokkies in.

701	702	703	704	705	706	707	708	709	710
711	712	713	714	715	716	717	718	719	720
721	722	723	724	725	726	727	728	729	730
731	732	733	734	735	736	737	738	739	740
741	742	743	744	745	746	747	748	749	750
751	752	753	754	755	756	757	758	759	760

Wat moet ek by 1 tel om 601 te kry?

600

Wat moet ek by 11 tel om 411 te kry?

400

Wat moet ek by 21 tel om 321 te kry?

300

Wat moet ek by 31 tel om 231 te kry?

200

Wat moet ek aftrek van 706 om 6 te kry?

700

Wat moet ek aftrek van 516 om 16 te kry?

500

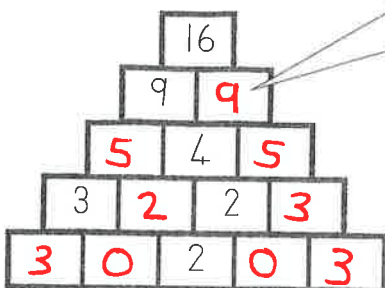
Wat moet ek aftrek van 126 om 26 te kry?

100

Wat moet ek aftrek van 336 om 36 te kry?

300

## Voltooi die piramide



Die getalle op die twee bakstene hieronder moet dieselfde waarde hê as die baksteen direk daarbo.

