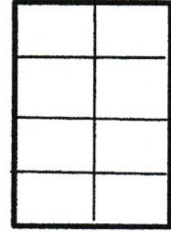
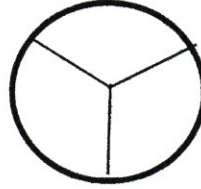

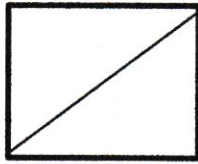
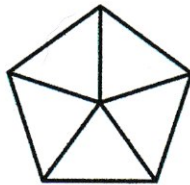



## HERSIENINGSOEFENING 1 - BREUKE

1. Kleur 1 deel van elke vorm in en benoem dit in woorde en as 'n breuk, bv. een vyfde en  $\frac{1}{5}$ . (Tekn die vorms in jou boek as die bladsy nie uitgedruk kan word nie.)



2. Kleur die breukdele in wat gevra word:

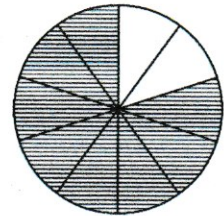
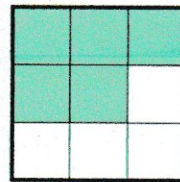

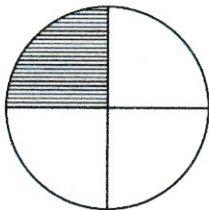


Drie kwarte

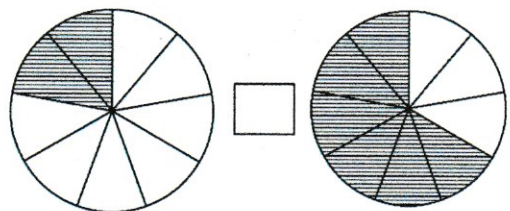
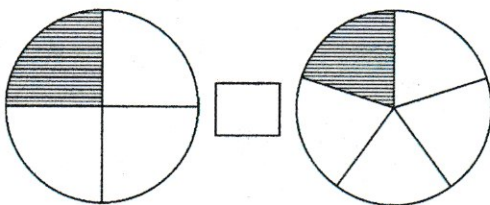
Twee vyfdes

Vier vyfdes

3. Watter breuk van die volgende is nie ingekleur nie?



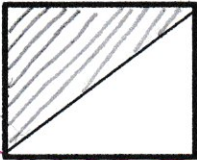

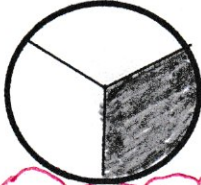

4. Vul in  $>$ ,  $<$  of  $=$ :



5. Verdeel 9 worsies gelykop tussen 4 maats. Hoeveel kry elke maat?  
Teken 'n prent om te wys wat jy doen.


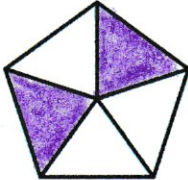

MEMORANDUM: HERSIENINGSOEFENING 1 - BREUKE

1 Kleur 1 deel van elke vorm in en benoem dit in woorde en as 'n breuk, bv. een vyfde en  $\frac{1}{5}$

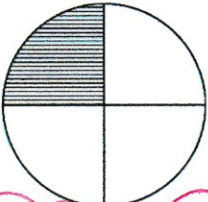


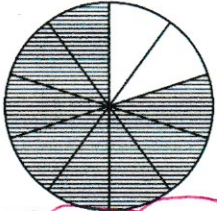
een halwe  $\frac{1}{2}$       een vyfde  $\frac{1}{5}$       een derde  $\frac{1}{3}$       een agste  $\frac{1}{8}$

2. Kleur die breukdele in wat gevra word:

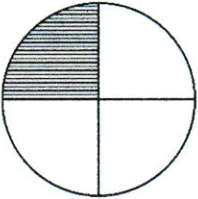
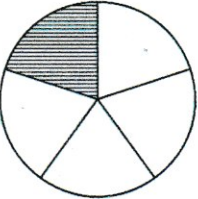
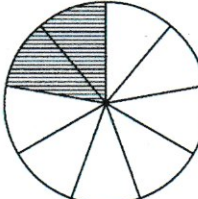
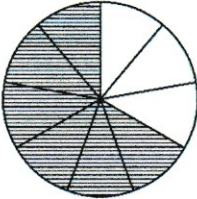
Drie kwarte      Twee vyfdes      Vier vyfdes

3. Watter breuk van die volgende is nie ingekleur nie?

drie kwarte ( $\frac{3}{4}$ )      drie vyfdes ( $\frac{3}{5}$ )      vier neendes ( $\frac{4}{9}$ )      twee tiendes ( $\frac{2}{10}$ )

4. Vul in >, < of =:


>

<

<


5. Verdeel 9 worsies gelykop tussen 4 maats. Hoeveel kry elke maat?

Teken 'n prent om te wys wat jy doen.




$1\frac{1}{4}$      $1\frac{1}{4}$      $1\frac{1}{4}$      $1\frac{1}{4}$       Elkeen kry 2 en 'n kwart ( $2\frac{1}{4}$ )