













Read

Before you read





1. Look at the title and headings in the chart below.
 - a) What kind of information does the weather chart show?
 - b) For how many days does the weather forecast provide information?

Five-day weather forecast for Kimberley




	Temperature	Wind	Weather	Cloud cover
Monday	23° C			
Tuesday	23° C			
Wednesday	21° C			
Thursday	17° C			
Friday	16° C			

KEY






Wind

-  calm
-  breeze
-  windy
-  strong wind

Cloud cover

-  clear
-  partly cloudy
-  cloudy

Weather

-  rain showers
-  drizzle
-  snow
-  hail
-  thunderstorm

Read

Read the weather chart and answer the questions below.

1. What days will have rain?
2. Will there be any snow in the week?
3. Are the following statements true or false? If the statement is false, then write the correct statement.
 - a) The temperature changes from warm to cold in the week.
 - b) The day with the most wind is Wednesday.
 - c) Three days of the week will be cloudy.
4. Copy the rows below and fill in the chart for Saturday: The weather for Saturday will be cloudy with a thunderstorm, and a temperature of 14° C.

	Temperature	Wind	Weather	Cloud cover
Saturday				