
Sigwoorde:

self	dis	woord
laat	eie	groot
hier	geen	net
julle	teen	want
die	onder	tyd

Woordherkenning:

koei	vloei	leeu	bloed
roei	sproei	sneeu	blaai
boei	goeie	spreeu	blaar
groei	foeitog	eeu	bloei
stoei		seemeeu	bly
broei		skreeu	blou
loei			

Datum: _____




Kyk baie mooi en omkring al die regter voete.





ie-klankie

Kyk na die prentjies en skryf die regte woorde neer.



Klank en sê die woorde.



Rymwoorde

Bou rymwoorde met die letters.

m b d f g h m n
s t v w

Voorbeeld:

mier 

__ier

__ier

__ier

__ier

__ier

__ier

__ier

__ier

__ier

__ier

__ier

Klank
en sê
die
woorde
weer.

k l n s v

kies

__ies

__ies

__ies

__ies

Klank
en sê
die
woorde
weer.

K g r

Kiet

__iet

__iet

Klank
en sê
die
woorde
weer.

M d s

Mien

__ien

__ien

Klank
en sê
die
woorde
weer.

Woordsoek

Datum: _____

Stoei en skreeu

B W V T H G F I N R K L Y V V F B G
O Q S F W G B L O E I B L S Y L Z O
E P E I S K R F O B O R K V N L D E
I E E M K D S O M O N O O K T E U I
S G M J R P D E E Z B E E S U S E E
P Z E N E G T I R I P I I P X P H U
R W E G E F Q T O L S S L R T R R K
O S U N U W V O E V E M T Q I E U J
E Q W F T T U G I R J E I O C E H W
I Z Y V L O E I T E I Y U C E U D S
D K R M S E O G X O E E U G Z I E F
S E J L H O A N L O E I R X H R E R


BLOEI
BOEI
BROEI
EEU
FOEITOG
GOEIE
GROEI

KOEI
LEEU
LOEI
ROEI
SEEMEEU
SKREEU
SNEEU

SPREEU
SPROEI
STOEI
VLOEI


Wiskunde:

Datum:



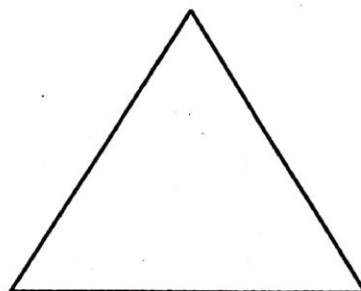

driehoek

Kom ons kyk na vorms!



vierkant

Meet elke sy van dié vorms:



'n Vierkant het _____ sye.

'n Driehoek het _____ sye.

1 sy van die vierkant is _____ cm

Al 4 sye is:

$$\underline{\quad} + \underline{\quad} + \underline{\quad} + \underline{\quad} = \square \text{ cm of}$$

$$\underline{\quad} \times \underline{\quad} = \square \text{ cm}$$


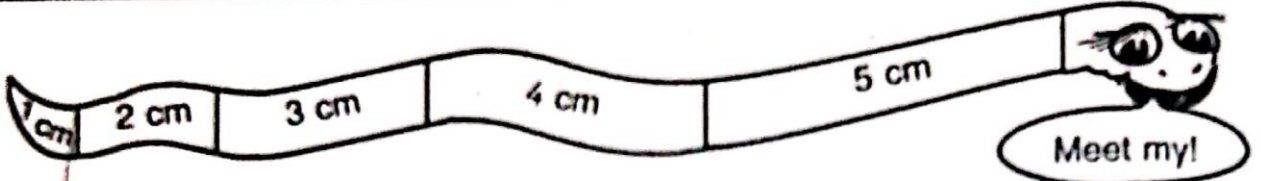
1 sy van die \triangle is _____ cm

Al 3 sye is:

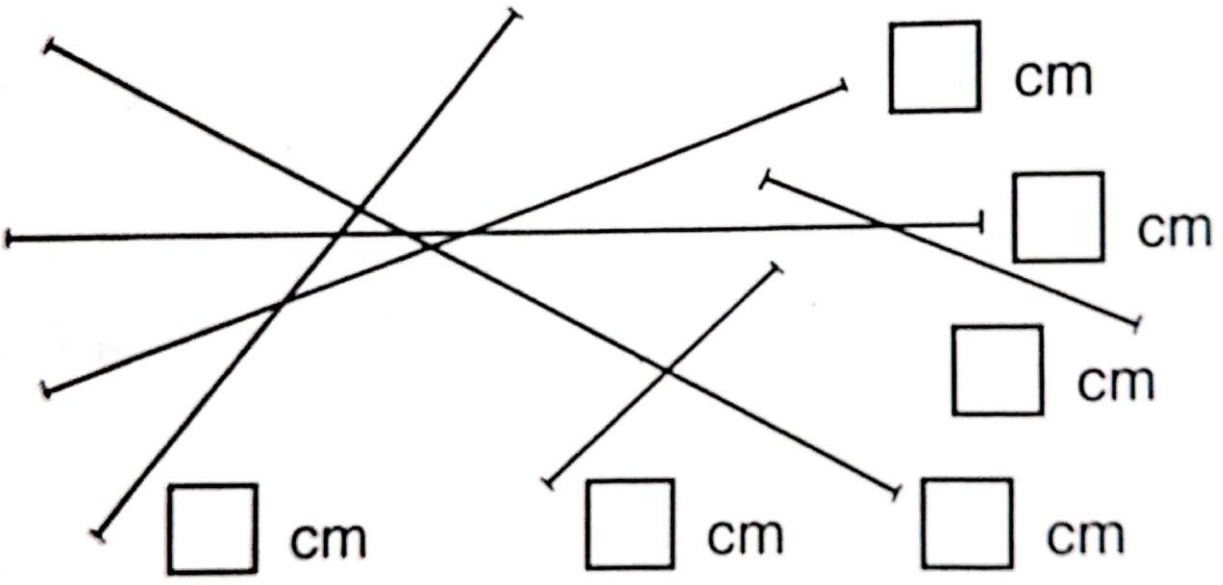
$$\underline{\quad} + \underline{\quad} + \underline{\quad} = \square \text{ cm of}$$

$$\underline{\quad} \times \underline{\quad} = \square \text{ cm}$$

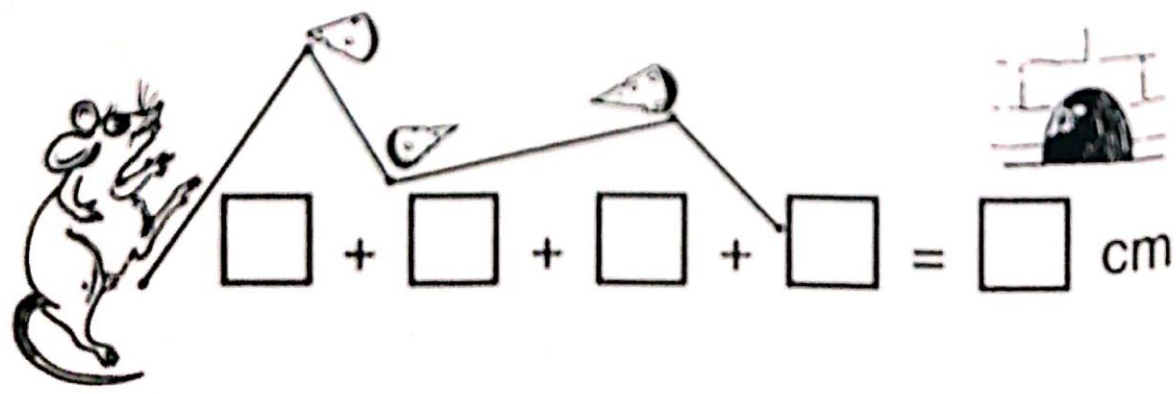
Datum:





$$\square + \square + \square = \square \text{ cm}$$



As jy al die lyne saam sit, hoe lank sal dit wees?

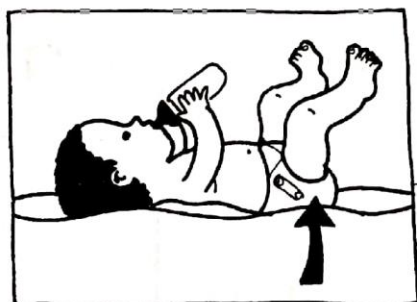

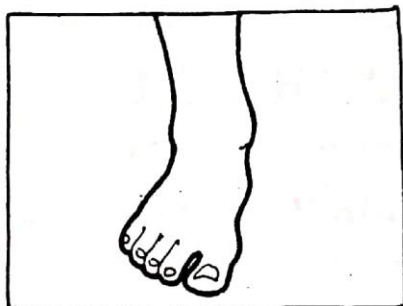




Ouditiewe geheue: Lees die opeenvolgende woorde en nommers slegs een keer. Laat die leerder dit agterna herhaal.

		
1. koei roei boei		
2. bloei loei leeu blaai		
3. groei eeu stoei bloei blou		
4. bloed bloei sproei bly sneeu		
5. broei foeitog seemeeu skreeu		
6. 2 5 8		
7. 3 7 8 2		
8. 4 7 4 5 6		
9. 1 8 4 3 7 6		
10. 7 3 6 8 1 9 3		

oe-klankie

Kyk na die prentjies en skryf die regte woorde neer.



Klank en sê die woorde.



Rymwoorde

Datum _____

58

Bou rymwoorde met die letters.

k b d h s

Voorbeeld:

↙ k o e k

___ o e k

___ o e k

___ o e k

___ o e k

Klank en sê die woorde weer.

b d k l r t v w

b o e r

___ o e r

___ o e r

___ o e r

___ o e r

___ o e r

___ o e r

___ o e r

Klank en sê die woorde weer.

v B m r s t

v o e t

___ o e t

___ o e t

___ o e t

___ o e t

___ o e t

Klank en sê die woorde weer.

s k



___ o e t

___ o e k

Spelling

Datum: _____

Kies 10 woorde uit die leeswerk van week 4 en vra om die spelling neer te skryf.

1. _____

2. _____

3. _____

4. _____

5. _____

6. _____

7. _____

8. _____

9. _____

10. _____

Wiskunde:

Datum:

Kyk mooi na hierdie horlosies:



3-uur



5-uur




$\frac{1}{2}$ 8




$\frac{1}{2}$ 2

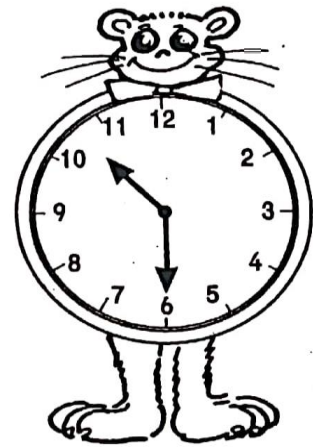
Het jy
opgelet
hoe laat
dit is?




uur




$\frac{1}{2}$




$\frac{1}{2}$



6-uur



8-uur



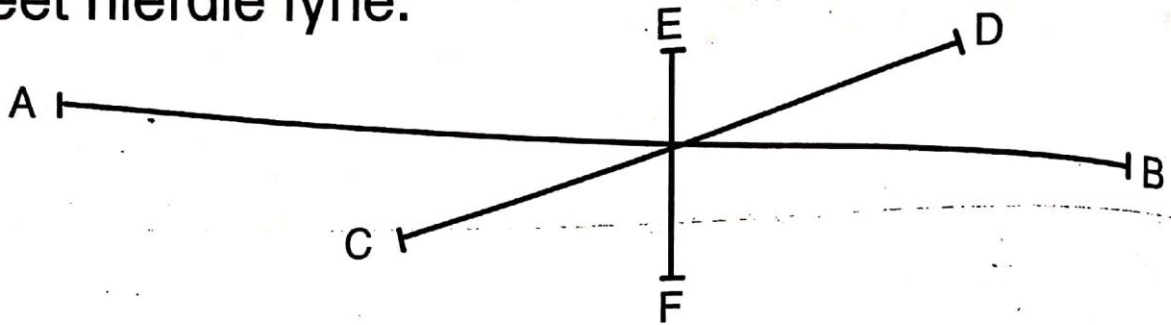
halftwaalf

Daar is ure in 'n dag.

Daar is ure in 3 dae.

Datum: _____

Meet hierdie lyne:



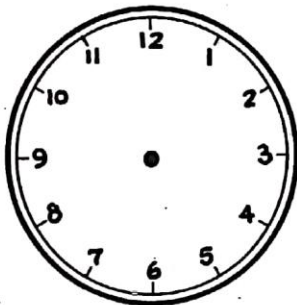
A tot B _____ cm

E tot F _____ cm

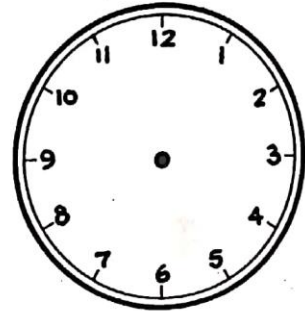
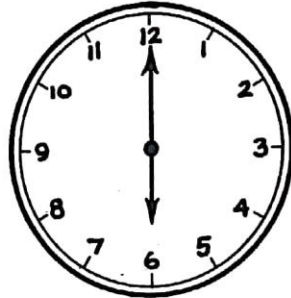
C tot D _____ cm

altesaam _____ cm

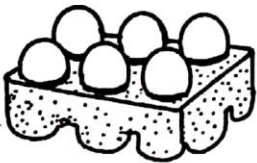
My liniaal was 60 cm lank. 'n Stuk van 15 cm het afgebreek.
Hoe lank is die ander stuk?



halfdrie



8-uur



R1,50



60c



12c



25c

2 dose eiers kos _____

4 balle kos _____

'n halwe dosyn piesangs kos _____

1 blom kos _____